

Joint Entrance Exam | Mains-2019

Paper Code -

12th April 2019 | Morning

PHYSICS , CHMISTRY & MATHEMATICS

Important Instructions:

1. Immediately fill in the particulars on this page of the Test Booklet with only Black Ball Point Pen provided in the examination hall.
2. The Answer Sheet is kept inside this Test Booklet. When you are directed to open the Test Booklet, take out the Answer Sheet and fill in the particulars carefully.
3. The test is of **3 hours** duration.
4. The Test Booklet consists of **90** questions. The maximum marks are **360**.
5. There are three parts in the question paper A, B, C consisting of **Physics, Mathematics** and **Chemistry** having 30 questions in each part of equal weightage. Each question is allotted **4 (four)** marks for correct response.
6. Candidate will be awarded marks as stated above in instruction No. 5 for correct response of each question. $\frac{1}{4}$ (one-fourth) marks of the total marks allotted to the questions (i.e. 1 mark) will be deducted for indicating incorrect response of each question. No deduction from the total score will be made if no response is indicated for an item in the answer sheet.
7. There is only one correct response for each question. Filling up more than one response in any question will be treated as wrong response and marks for wrong response will be deducted accordingly as per instruction 6 above.
8. For writing particulars/markings responses on *Side-1* and *Side-2* of the Answer Sheet use **only Black Ball Point Pen** provided in the examination hall.
9. No candidate is allowed to carry any textual material, printed or written, bits of papers, pager, mobile phone, any electronic device, etc. except the Admit Card inside the examination room/hall.
10. Rough work is to be done on the space provided for this purpose in the Test Booklet only. This space is given at the bottom of each page and in **four** pages (Page **20-23**) at the end of the booklet.
11. On completion of the test, the candidate must hand over the Answer Sheet to the **Invigilator** on duty in the Room/Hall. **However, the candidates are allowed to take away this Test Booklet with them.**
12. The CODE for this Booklet is **B**. Make sure that the CODE printed on *Side-2* of the Answer Sheet is same as that on this Booklet. Also tally the serial number of the Test Booklet and Answer Sheet are the same as that on this booklet. In case of discrepancy, the candidate should immediately report the matter to the Invigilator for replacement of both the Test Booklet and the Answer Sheet.
13. **Do not fold or make any stray mark on the Answer Sheet.**

Joint Entrance Exam/IITJEE-2019

PART-A	PHYSICS
---------------	----------------

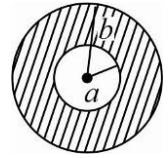
1. A circular disc of radius b has a hole of radius a at its centre (see figure). If the mass per unit area of the disc varies as $\left(\frac{\sigma_0}{r}\right)$, then the radius of gyration of the disc about its axis passing through the centre is:

(1) $\frac{a+b}{2}$

(2) $\sqrt{\frac{a^2 + b^2 + ab}{2}}$

(3) $\sqrt{\frac{a^2 + b^2 + ab}{3}}$

(4) $\frac{a+b}{3}$



2. A magnetic compass needle oscillates 30 times per minute at a place where the dip is 45° , and 40 times per minute where the dip is 30° . If B_1 and B_2 are respectively the total magnetic field due to the earth at the two places, then the ratio B_1 / B_2 is best given by:

(1) 0.7

(2) 2.2

(3) 3.6

(4) 1.8

3. Two moles of helium gas is mixed with three moles of hydrogen molecules (taken to be rigid). What is the molar specific heat of mixture at constant volume? ($R = 8.3 \text{ J/mol K}$)

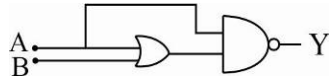
(1) 15.7 J/mol K

(2) 19.7 J/mol K

(3) 17.4 J/mol K

(4) 21.6 J/mol K

4. The truth table for the circuit given in the fig. is:



(1)

A	B	Y
0	0	0
0	1	0
1	0	1
1	1	1

(2)

A	B	Y
0	0	1
0	1	0
1	0	0
1	1	0

(3)

A	B	Y
0	0	1
0	1	1
1	0	0
1	1	0

(4)

A	B	Y
0	0	1
0	1	1
1	0	1
1	1	1

5. A shell is fired from a fixed artillery gun with an initial speed u such that it hits the target on the ground at a distance R from it. If t_1 and t_2 are the values of the time taken by it to hit the target in two possible ways, the product $t_1 t_2$ is:

(1) R/g

(2) $R/4g$

(3) $2R/g$

(4) $R/2g$

6. A thin ring of 10 cm radius carries a uniformly distributed charge. The ring rotates at a constant angular speed of $40\pi \text{ rad s}^{-1}$ about its axis, perpendicular to its plane. If the magnetic field at its centre is $3.8 \times 10^{-9} \text{ T}$, then the charge carried by the ring is close to $(\mu_0 = 4\pi \times 10^{-7} \text{ N/A}^2)$.

(1) $3 \times 10^{-5} \text{ C}$

(2) $7 \times 10^{-6} \text{ C}$

(3) $4 \times 10^{-5} \text{ C}$

(4) $2 \times 10^{-6} \text{ C}$

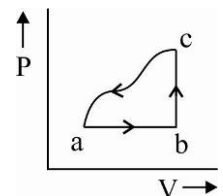
7. A sample of an ideal gas is taken through the cyclic process abca as shown in the figure. The change in the internal energy of the gas along the path ca is -180 J . The gas absorbs 250 J of heat along the path ab and 60 J along the path bc. The work done by the gas along the path abc is:

(1) 140 J

(2) 100 J

(3) 120 J

(4) 130 J



8. Which of the following combinations has the dimension of electrical resistance (ϵ_0 is the permittivity of vacuum and μ_0 is the permeability of vacuum)?

- (1) $\sqrt{\frac{\epsilon_0}{\mu_0}}$ (2) $\sqrt{\frac{\mu_0}{\epsilon_0}}$ (3) $\frac{\mu_0}{\epsilon_0}$ (4) $\frac{\epsilon_0}{\mu_0}$

9. A person of mass M is, sitting on a swing of length L and swinging with an angular amplitude θ_0 . If the person stands up when the swing passes through its lowest point, the work done by him, assuming that his centre of mass moves by a distance l ($l \ll L$), is close to:

- (1) Mgl (2) $Mgl(1-\theta_0^2)$ (3) $Mgl\left(1+\frac{\theta_0^2}{2}\right)$ (4) $Mgl(1+\theta_0^2)$

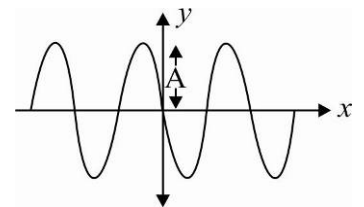
10. A man (mass = 50 kg) and his son (mass = 20 kg) are standing on a frictionless surface facing each other. The man pushes his son so that he starts moving at a speed of 0.70 ms^{-1} with respect to the man. The speed of the man with respect to the surface is:

- (1) 0.14 ms^{-1} (2) 0.47 ms^{-1} (3) 0.28 ms^{-1} (4) 0.20 ms^{-1}

11. A progressive wave travelling along the positive x -direction is represented by $y(x,t) = A \sin(kx - \omega t + \phi)$. Its snapshot at $t = 0$ is given in the figure.

For this wave, the phase ϕ is:

- (1) $-\frac{\pi}{2}$ (2) $\frac{\pi}{2}$
 (3) π (4) 0



12. At 40°C , a brass wire of 1 mm radius is hung from the ceiling. A small mass, M is hung from the free end of the wire. When the wire is cooled down from 40°C to 20°C it regains its original length of 0.2 m. The value of M is close to:

(Coefficient of linear expansion and Young's modulus of brass are $10^{-5}/^\circ\text{C}$ and 10^{11} N/m^2 , respectively; $g = 10 \text{ ms}^{-2}$)

- (1) 9 kg (2) 1.5 kg (3) 0.5 kg (4) 0.9 kg

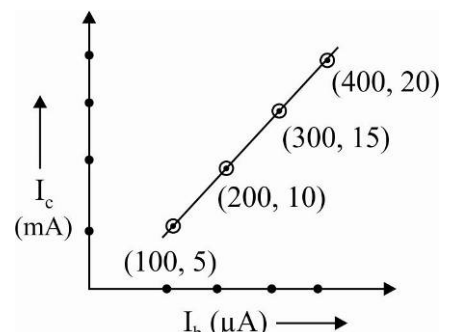
13. A submarine (A) travelling at 18 km/hr is being chased along the line of its velocity by another submarine (B) travelling at 27 km/hr. B sends a sonar signal of 500 Hz to detect A and receives a reflected sound of frequency ν . The value of ν is close to:

(Speed of sound in water = 1500 ms^{-1})

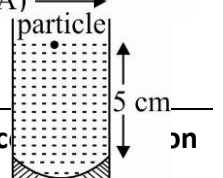
- (1) 502 Hz (2) 499 Hz (3) 504 Hz (4) 507 Hz

14. The transfer characteristic curve of a transistor, having input and output resistance 100Ω and $100 \text{ k}\Omega$ respectively, is shown in the figure. The Voltage and Power gain, are respectively:

- (1) $2.5 \times 10^4, 2.5 \times 10^6$
 (2) $5 \times 10^4, 2.5 \times 10^6$
 (3) $5 \times 10^4, 5 \times 10^5$
 (4) $5 \times 10^4, 5 \times 10^6$



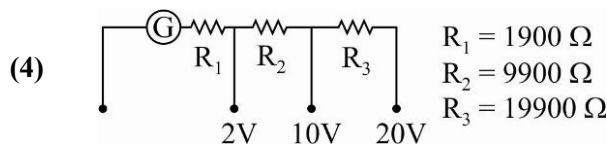
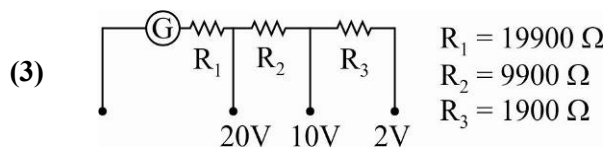
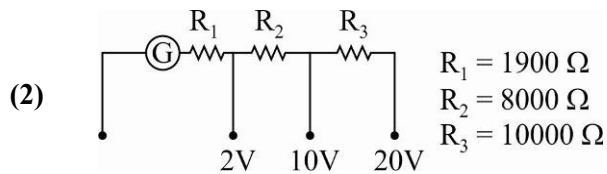
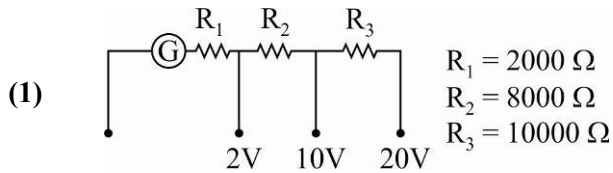
15. A concave mirror has radius of curvature of 40 cm. It is at the bottom of a glass that has water filled up to 5 cm (see figure). If a small particle is floating on the



surface of water, its image as seen, from directly above the glass, is at a distance d from the surface of water. The value of d is close to: (Refractive index of water = 1.33)

- (1) 8.8 cm (2) 11.7 cm (3) 6.7 cm (4) 13.4 cm

16. A galvanometer of resistance 100Ω has 50 divisions on its scale and has sensitivity of $20\mu A/\text{division}$. It is to be converted to a voltmeter with three ranges, of 0-2V, 0-10V and 0-20V. The appropriate circuit to do so is:



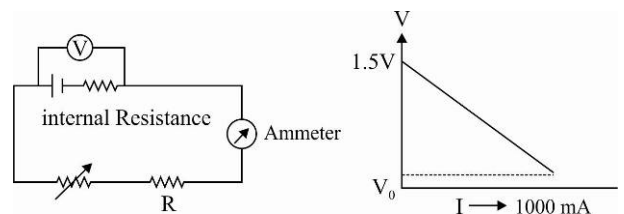
17. An excited He^+ ion emits two photons in succession, with wavelengths 108.5 nm and 30.4 nm, in making a transition to ground state. The quantum number n , corresponding to its initial excited state is (for photon of wavelength λ , energy $E = \frac{1240 eV}{\lambda(\text{in nm})}$):

- (1) $n = 6$ (2) $n = 5$ (3) $n = 7$ (4) $n = 4$

18. In a double slit experiment, when a thin film of thickness t having refractive index μ is introduced in front of one of the slits, the maximum at the centre of the fringe pattern shifts by one fringe width. The value of t is (λ is the wavelength of the light used):

- (1) $\frac{\lambda}{(2\lambda - 1)}$ (2) $\frac{\lambda}{(\mu - 1)}$ (3) $\frac{2\lambda}{(\mu - 1)}$ (4) $\frac{\lambda}{2(\mu - 1)}$

19. Two verify Ohm's law, a student connects the voltmeter across the battery as, shown in the figure. The measured voltage is plotted as a function of the current, and the following graph is obtained:



If V_0 is almost zero, identify the correct statement:

- (1) The value of the resistance R is 1.5Ω
 (2) The emf of the battery is 1.5 V and the value of R is 1.5Ω
 (3) The potential difference across the battery is 1.5V when it sends a current of 1000 mA
 (4) The emf of the battery is 1.5V and its internal resistance is 1.5Ω
20. Two identical parallel plate capacitors, of capacitance C each, have plates of area A , separated by a distance d . The space between the plates of the two capacitors, is filled with three dielectrics, of equal

thickness and dielectric constants K_1, K_2 and K_3 . The first capacitor is filled as shown in fig. I, and the second one is filled as shown in fig. II.

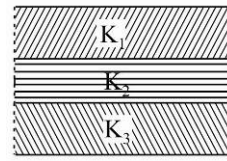
If these two modified capacitors are charged by the same potential V , the ratio of the energy stored in the two, would be (E_1 refers to capacitor (I) and E_2 to capacitor (II)):

(1)
$$\frac{E_1}{E_2} = \frac{(K_1 + K_2 + K_3)(K_2K_3 + K_3K_1 + K_1K_2)}{9K_1K_2K_3}$$

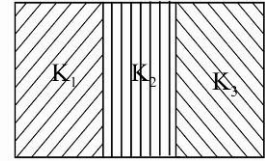
(2)
$$\frac{E_1}{E_2} = \frac{K_1K_2K_3}{(K_1 + K_2 + K_3)(K_2K_3 + K_3K_1 + K_1K_2)}$$

(3)
$$\frac{E_1}{E_2} = \frac{9K_1K_2K_3}{(K_1 + K_2 + K_3)(K_2K_3 + K_3K_1 + K_1K_2)}$$

(4)
$$\frac{E_1}{E_2} = \frac{(K_1 + K_2 + K_3)(K_2K_3 + K_3K_1 + K_1K_2)}{K_1K_2K_3}$$



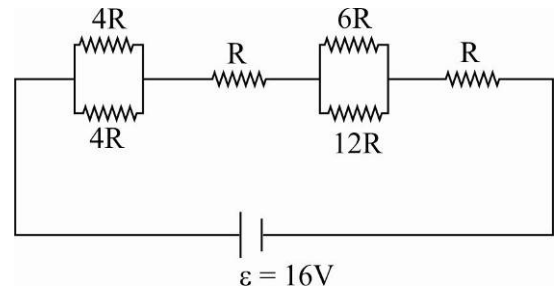
(I)



(II)

21. The resistive network shown below is connected to a D.C. source of 16V. The power consumed by the network is 4 Watt. The value of R is:

- (1) 6Ω
 (2) 8Ω
 (3) 1Ω
 (4) 16Ω



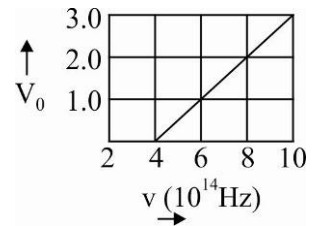
22. The stopping potential V_0 (in volt) as a function of frequency (ν) for a sodium emitter, is shown in the figure. The work function of sodium, from the data plotted in the figure, will be:

(Given : Planck's constant)

($h = 6.63 \times 10^{-34} \text{ Js}$, electron

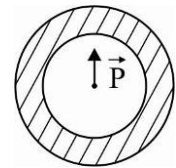
charge $e = 1.6 \times 10^{-19} \text{ C}$)

- (1) 1.95 eV (2) 2.12 eV (3) 1.66 eV (4) 1.82 eV



23. Shown in the figure is a shell made of a conductor. It has inner radius a and outer radius b , and carries charge Q , At its centre is a dipole \vec{P} as shown. In this case:

- (1) surface charge density on the outer surface depends on $|\vec{p}|$
 (2) surface charge density on the inner surface of the shell is zero every where
 (3) electric field outside the shell is the same as that of a point charge at the centre of the shell
 (4) surface charge density on the inner surface is uniform and equal to $\left(\frac{Q/2}{4\pi a^2}\right)$



24. A point dipole $\vec{p} = -p_0 \hat{x}$ is kept at the origin. The potential and electric field due to this dipole on the y -axis at a distance d are, respectively: (Take $V = 0$ at infinity)

(1) $\frac{|\vec{p}|}{4\pi\epsilon_0 d^2}, \frac{-\vec{p}}{4\pi\epsilon_0 d^3}$ (2) $0, \frac{-\vec{p}}{4\pi\epsilon_0 d^3}$

(3) $\frac{|\vec{p}|}{4\pi\epsilon_0 d^2}, \frac{\vec{p}}{4\pi\epsilon_0 d^3}$ (4) $0, \frac{\vec{p}}{4\pi\epsilon_0 d^3}$

25. When M_1 gram of ice at -10°C (specific heat = $0.5 \text{ cal g}^{-1}\text{C}^{-1}$) is added to M_2 gram of water at 50°C , finally no ice is left and the water is at 0°C . The value of latent heat of ice, in cal g^{-1} is:

- (1) $\frac{50M_2}{M_1}$ (2) $\frac{5M_2}{M_1} - 5$ (3) $\frac{5M_1}{M_2} - 50$ (4) $\frac{50M_2}{M_1} - 5$

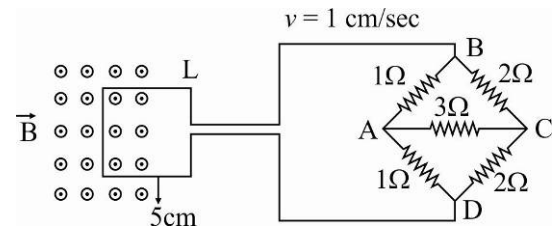
26. The value of numerical aperture of the objective lens of a microscope is 1.25. If light of wavelength 5000 \AA is used, the minimum separation between two points, to be seen as distinct, will be:

- (1) 0.24 \mu m (2) 0.12 \mu m (3) 0.38 \mu m (4) 0.48 \mu m

27. The trajectory of a projectile near the surface of the earth is given as $y = 2x - 9x^2$. If it were launched at an angle θ_0 with speed v_0 then ($g = 10 \text{ ms}^{-2}$):

- (1) $\theta_0 = \cos^{-1}\left(\frac{1}{\sqrt{5}}\right)$ and $v_0 = \frac{5}{3} \text{ ms}^{-1}$ (2) $\theta_0 = \sin^{-1}\left(\frac{1}{\sqrt{5}}\right)$ and $v_0 = \frac{5}{3} \text{ ms}^{-1}$
 (3) $\theta_0 = \cos^{-1}\left(\frac{2}{\sqrt{5}}\right)$ and $v_0 = \frac{3}{5} \text{ ms}^{-1}$ (4) $\theta_0 = \sin^{-1}\left(\frac{2}{\sqrt{5}}\right)$ and $v_0 = \frac{3}{5} \text{ ms}^{-1}$

28. The figure shown a square loop L of side 5 cm which is connected to a network of resistance. The whole setup is moving towards right with a constant speed of 1 cm s^{-1} . At some instant, a part of L is in a uniform magnetic field of 1 T, perpendicular to the plane of the loop. If the resistance of L is 1.7Ω , the current in the loop at that instant will be close to:



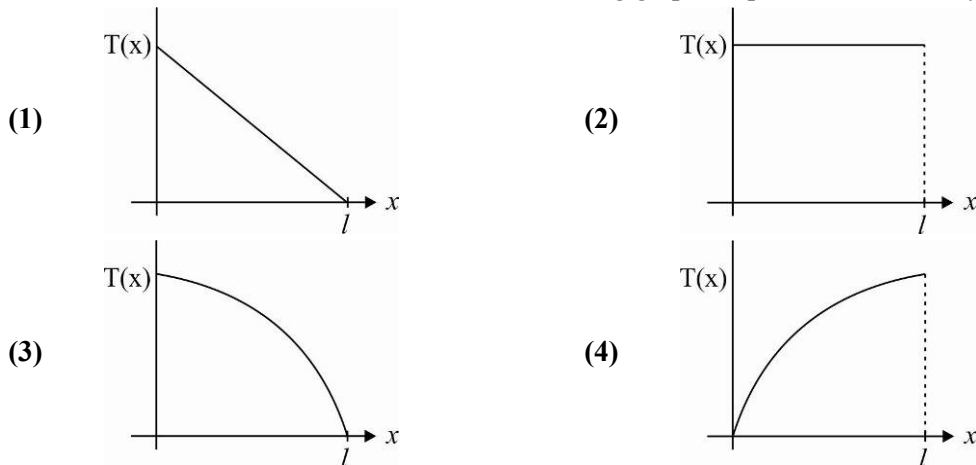
- (1) 60 \mu A (2) 115 \mu A (3) 170 \mu A (4) 150 \mu A

29. An electromagnetic wave is represented by the electric field

$\vec{E} = E_0 \hat{n} \sin[\omega t + (6y - 8z)]$. Taking unit vectors in x, y and z directions to be $\hat{i}, \hat{j}, \hat{k}$, the direction of propagation \hat{s} , is:

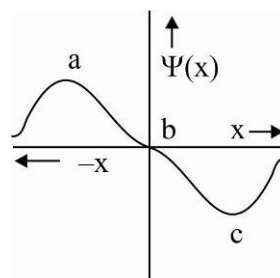
- (1) $\hat{s} = \frac{3\hat{i} - 4\hat{j}}{5}$ (2) $\hat{s} = \frac{4\hat{j} - 3\hat{k}}{5}$ (3) $\hat{s} = \frac{-4\hat{k} + 3\hat{j}}{5}$ (4) $\hat{s} = \left(\frac{-3\hat{j} + 4\hat{k}}{5}\right)$

30. A uniform rod of length l is being rotated in a horizontal plane with a constant angular speed about an axis passing through one of its ends. If the tension generated in the rod due to rotation is $T(x)$ at a distance x from the axis, then which of the following graphs depicts it most closely?

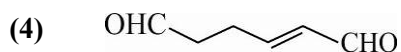
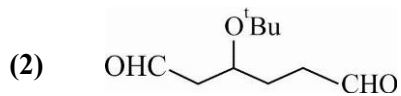
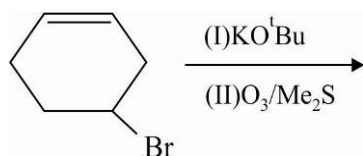


PART-B	CHEMISTRY
---------------	------------------

- An organic compound 'A' is oxidized with Na_2O_2 followed by boiling with HNO_3 . The resultant solution is then treated with ammonium molybdate to yield a yellow precipitate. Based on above observation, the element present in the given compound is:
 (1) Sulphur (2) Fluorine (3) Phosphorus (4) Nitrogen
- The correct statement among the following is:
 (1) $(\text{SiH}_3)_3\text{N}$ is planar and less basic than $(\text{CH}_3)_3\text{N}$
 (2) $(\text{SiH}_3)_3\text{N}$ is planar and more basic than $(\text{CH}_3)_3\text{N}$
 (3) $(\text{SiH}_3)_3\text{N}$ is pyramidal and less basic than $(\text{CH}_3)_3\text{N}$
 (4) $(\text{SiH}_3)_3\text{N}$ is pyramidal and more basic than $(\text{CH}_3)_3\text{N}$
- An element has a face-centred cubic (fcc) structure with a cell edge of a . The distance between the centres of two nearest tetrahedral voids in the lattice is:
 (1) $\sqrt{2}a$ (2) $\frac{a}{2}$ (3) a (4) $\frac{3}{2}a$
- An example of a disproportionation reaction is:
 (1) $2\text{KMnO}_4 \rightarrow \text{K}_2\text{MnO}_4 + \text{MnO}_2 + \text{O}_2$
 (2) $2\text{NaBr} + \text{Cl}_2 \rightarrow 2\text{NaCl} + \text{Br}_2$
 (3) $2\text{MnO}_4^- + 10\text{I}^- + 16\text{H}^+ \rightarrow 2\text{Mn}^{2+} + 5\text{I}_2 + 8\text{H}_2\text{O}$
 (4) $2\text{CuBr} \rightarrow \text{CuBr}_2 + \text{Cu}$
- The electrons are more likely to be found:
 (1) in the region a and c
 (2) only in the region a
 (3) in the region a and b
 (4) only in the region c



- What is the molar solubility of $\text{Al}(\text{OH})_3$ in 0.2 M NaOH solution? Given that, solubility product of $\text{Al}(\text{OH})_3 = 2.4 \times 10^{-24}$:
 (1) 3×10^{-22} (2) 12×10^{-23} (3) 12×10^{-21} (4) 3×10^{-19}
- The mole fraction of a solvent in aqueous solution of a solute is 0.8. The molality (in mol kg^{-1}) of the aqueous solution is:
 (1) 13.88 (2) 13.88×10^{-2} (3) 13.88×10^{-3} (4) 13.88×10^{-1}
- An ideal gas is allowed to expand from 1L to 10 L against a constant external pressure of 1 bar. The work done in kJ is:
 (1) -0.9 (2) -2.0 (3) -9.0 (4) +10.0
- The major product(s) obtained in the following reaction is/are:



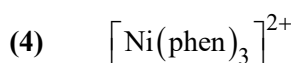
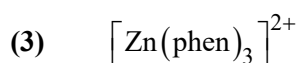
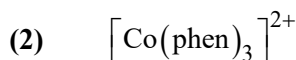
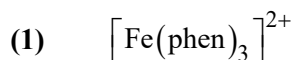
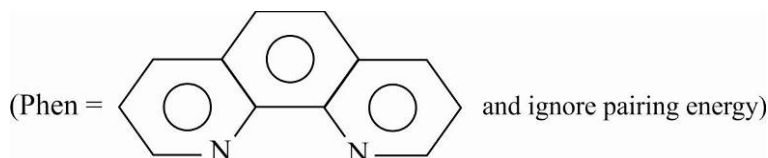
10. Enthalpy of sublimation of iodine is 24 cal g^{-1} at 200°C . If specific heat of $\text{I}_2(\text{s})$ and $\text{I}_2(\text{vap})$ are 0.055 and $0.031 \text{ cal g}^{-1}\text{K}^{-1}$ respectively, then enthalpy of sublimation of iodine at 250°C in cal g^{-1} is:

- (1) 5.7 (2) 22.8 (3) 11.4 (4) 2.85

11. Which of the following is a thermosetting polymer?

- (1) Bakelite (2) PVC (3) Buna-N (4) Nylon 6

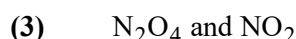
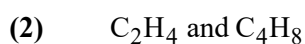
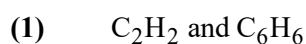
12. The complex ion that will lose its crystal field stabilization energy upon oxidation of its metal to +3 state is:



13. In the following reaction; $x\text{A} \rightarrow y\text{B}$

$$\log_{10} \left[-\frac{d[\text{A}]}{dt} \right] = \log_{10} \left[\frac{d[\text{B}]}{dt} \right] + 0.3010$$

'A' and 'B' respectively can be:



14. The group number, number of valence electrons, and valency of an element with atomic number 15, respectively, are:

- (1) 15,6 and 2 (2) 16,6 and 3 (3) 15,5 and 3 (4) 16,5 and 2

15. The metal that gives hydrogen gas upon treatment with both acid as well as base is :

- (1) magnesium (2) mercury (3) zinc (4) iron

16. The correct set of species responsible for the photochemical smog is:



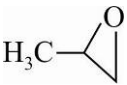
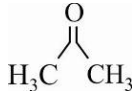
17. Glucose and Galactose are having identical configuration in all the positions except position.

- (1) C-3 (2) C-2 (3) C-4 (4) C-5

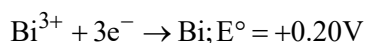
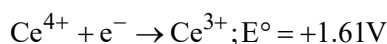
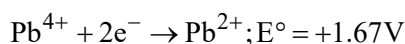
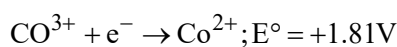
18. But-2-ene on reaction with alkaline KMnO_4 at elevated temperature followed by acidification will give:

- (1) one molecule of CH_3CHO and one molecule of CH_3COOH
 (2) 2 molecules of CH_3CHO
 (3) $\text{CH}_3 - \underset{\text{OH}}{\text{CH}} - \underset{\text{OH}}{\text{CH}} - \text{CH}_3$
 (4) 2 molecules of CH_3COOH

19. The major product of the following addition reaction is $\text{H}_3\text{C} - \text{CH} = \text{CH}_2 \xrightarrow{\text{Cl}_2/\text{H}_2\text{O}}$

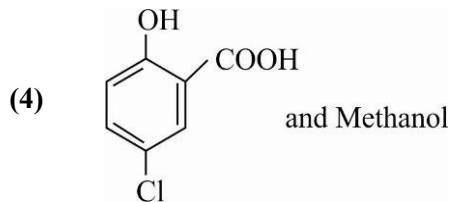
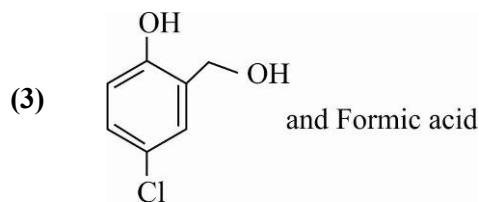
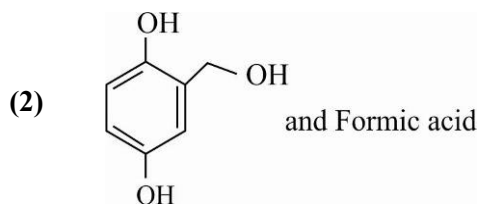
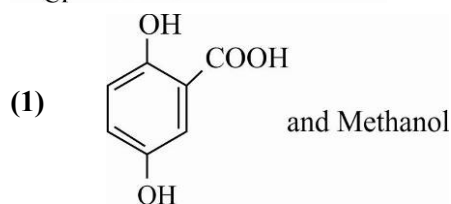
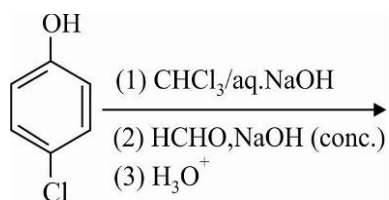
- (1)  (2) $\text{CH}_3 - \underset{\text{Cl}}{\text{CH}} - \underset{\text{Cl}}{\text{CH}_2}$ (3)  (4) $\text{H}_3\text{C} - \underset{\text{OH}}{\text{CH}} - \underset{\text{Cl}}{\text{CH}_2}$

20. Given:

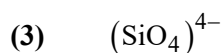
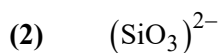
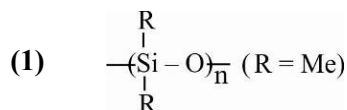


Oxidizing power of the species will increase in the order:


- (1) $\text{Ce}^{4+} < \text{Pb}^{4+} < \text{Bi}^{3+} < \text{Co}^{3+}$ (2) $\text{Co}^{3+} < \text{Ce}^{4+} < \text{Bi}^{3+} < \text{Pb}^{4+}$
 (3) $\text{Bi}^{3+} < \text{Ce}^{4+} < \text{Pb}^{4+} < \text{Co}^{3+}$ (4) $\text{Co}^{3+} < \text{Pb}^{4+} < \text{Ce}^{4+} < \text{Bi}^{3+}$
21. The idea of froth floatation method came from a person X and this method is related to the process Y of ores. X and Y, respectively, are:
 (1) washer man and reduction (2) fisher woman and concentration
 (3) washer woman and concentration (4) fisher man and reduction
22. 5 moles of AB_2 weight $125 \times 10^{-3} \text{ kg}$ and 10 moles of A_2B_2 weight $300 \times 10^{-3} \text{ kg}$. The molar mass of A(M_A) molar mass of B(M_B) in kg mol^{-1} are:
 (1) $M_A = 50 \times 10^{-3}$ and $M_B = 25 \times 10^{-3}$ (2) $M_A = 25 \times 10^{-3}$ and $M_B = 50 \times 10^{-3}$
 (3) $M_A = 5 \times 10^{-3}$ and $M_B = 10 \times 10^{-3}$ (4) $M_A = 10 \times 10^{-3}$ and $M_B = 5 \times 10^{-3}$
23. Which of the following statements is not true about RNA?
 (1) It controls the synthesis of protein
 (2) It is present in the nucleus of the cell
 (3) It has always double stranded α - helix structure
 (4) It usually does not replicate
24. The major products of the following reactions are:



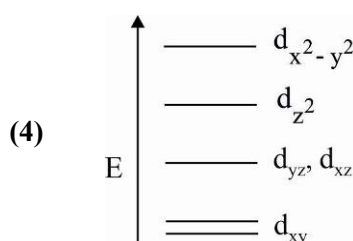
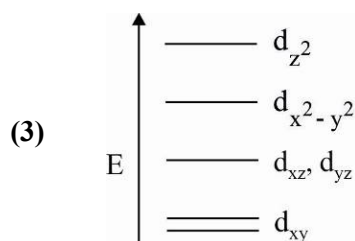
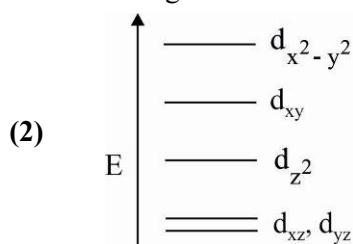
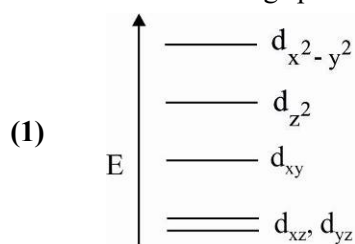
25. The basic structural unit of feldspar, zeolites, mica, and asbestos is:



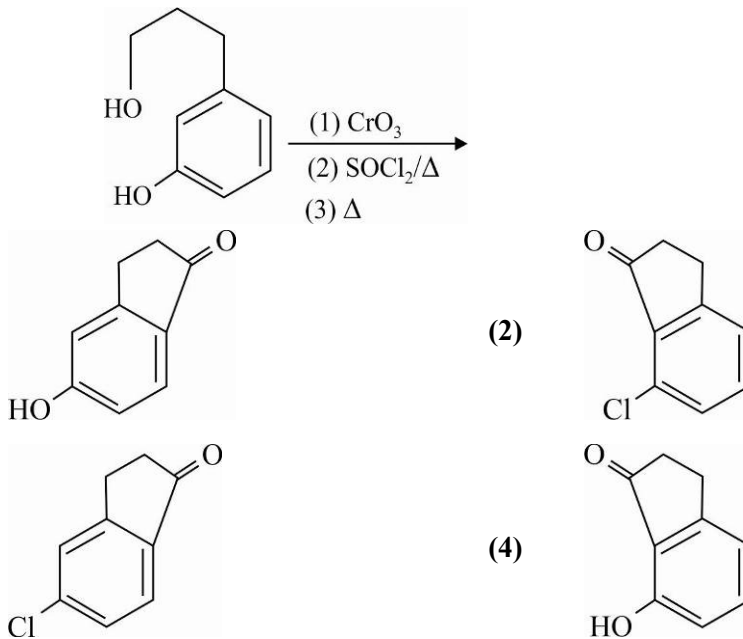
26. The correct sequence of thermal stability of the following carbonates is:



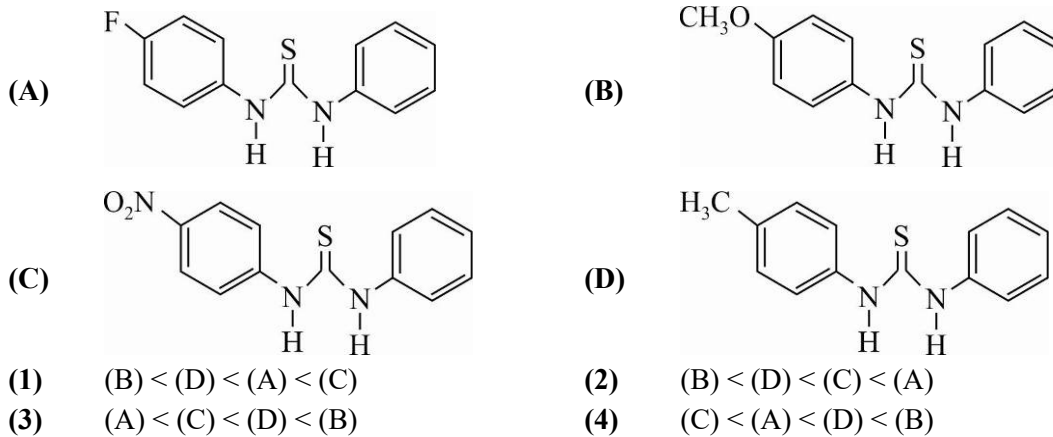
27. Complete removal of both the axial ligands (along the z-axis) from an octahedral complex leads to which of the following splitting patterns? (relative orbital energies not on scale).



28. The major product of the following reaction is:



29. The increasing order of the pK_b of the following compound is:



30. Peptization is a:

- (1) process of converting precipitate into colloidal solution
- (2) process of converting soluble particles to from colloidal solution
- (3) process of converting a colloidal solution into precipitate
- (4) process of bringing colloidal molecule into solution

PART-C	MATHEMATICS
---------------	--------------------

1. Let S_n denote the sum of the first n terms of an A.P.. If $S_4 = 16$ and $S_6 = -48$, then S_{10} is equal to:

(1) -260 (2) -320 (3) -410 (4) -380
2. If m is the minimum value of k for which the function $f(x) = x\sqrt{kx - x^2}$ is increasing in the interval $[0, 3]$ and M is the maximum value of f in $[0, 3]$ when $k = m$, then the ordered pair (m, M) is equal to:

(1) $(3, 3\sqrt{3})$ (2) $(5, 3\sqrt{6})$ (3) $(4, 3\sqrt{2})$ (4) $(4, 3\sqrt{3})$
3. The coefficient of x^{18} in the product $(1+x)(1-x)^{10}(1+x+x^2)^9$ is:

(1) -126 (2) 84 (3) -84 (4) 126

4. Let a random variable X have a binomial distribution with mean 8 and variance 4. If $P(x \leq 2) = \frac{k}{2^{16}}$, then k is equal to:
 (1) 137 (2) 17 (3) 1 (4) 121
5. For $x \in R$, let $[X]$ denote the greatest integer $\leq x$, then the sum of the series $\left[-\frac{1}{3}\right] + \left[-\frac{1}{3} - \frac{1}{100}\right] + \left[-\frac{1}{3} - \frac{2}{100}\right] + \dots + \left[-\frac{1}{3} - \frac{99}{100}\right]$ is
 (1) -131 (2) -153 (3) -133 (4) -135
6. If $\int_0^{\pi/2} \frac{\cot x}{\cot x + \operatorname{cosec} x} dx = m(\pi + n)$, then m, n is equal to:
 (1) 1 (2) $\frac{1}{2}$ (3) $-\frac{1}{2}$ (4) -1
7. If the truth value of the statement $p \rightarrow (\sim q \vee r)$ is false (F), then the truth values of the statements p, q, r are
 (1) T,F,F (2) T,F,T (3) F,T,T (4) T,T,F
8. The number of ways of choosing 10 objects out of 31 objects of which 10 are identical and the remaining 21 are distinct, is:
 (1) 2^{20} (2) $2^{20} + 1$ (3) $2^{30} - 1$ (4) 2^{21}
9. The equation $|z - i| = |z - 1|, i = \sqrt{-1}$, represents:
 (1) the line through the origin with slope -1
 (2) a circle of radius $\frac{1}{2}$
 (3) a circle of radius 1
 (4) the line through the origin with slope 1
10. If the normal to the ellipse $3x^2 + 4y^2 + 4y^2 = 12$ at a point P on it is parallel to the line, $2x + y = 4$ and the tangent to the ellipse at p passes through $Q(4, 4)$ then PQ is equal to:
 (1) $\frac{\sqrt{61}}{2}$ (2) $\frac{\sqrt{157}}{2}$ (3) $\frac{\sqrt{221}}{2}$ (4) $\frac{5\sqrt{5}}{2}$
11. The value of $\sin^{-1}\left(\frac{12}{13}\right) - \sin^{-1}\left(\frac{3}{5}\right)$ is equal to:
 (1) $\frac{\pi}{2} - \cos^{-1}\left(\frac{9}{65}\right)$ (2) $\pi - \cos^{-1}\left(\frac{33}{65}\right)$
 (3) $\frac{\pi}{2} - \sin^{-1}\left(\frac{56}{65}\right)$ (4) $\pi - \sin^{-1}\left(\frac{63}{65}\right)$
12. A 2m ladder leans against a vertical wall. If the top of the ladder begins to slide down the wall at the rate 25cm/sec., then the rate (in cm/sec.) at which the bottom of the ladder slides away from the wall on the horizontal ground when the top of the ladder is 1m above the ground is:
 (1) $\frac{25}{\sqrt{3}}$ (2) 25 (3) $25\sqrt{3}$ (4) $\frac{25}{3}$
13. If the area (in sq. units) of the region $\{(x, y) : y^2 \leq 4x, x + y \leq 1, x \geq 0, y \geq 0\}$ is $a\sqrt{2} + b$, then $a - b$ is equal to:
 (1) $\frac{8}{3}$ (2) $\frac{10}{3}$ (3) $-\frac{2}{3}$ (4) 6

14. If A is a symmetric matrix and B is a skew-symmetric matrix such that $A+B = \begin{bmatrix} 2 & 3 \\ 5 & -1 \end{bmatrix}$, then AB is equal to:
- (1) $\begin{bmatrix} -4 & 2 \\ 1 & 4 \end{bmatrix}$ (2) $\begin{bmatrix} 4 & -2 \\ -1 & -4 \end{bmatrix}$ (3) $\begin{bmatrix} 4 & -2 \\ 1 & -4 \end{bmatrix}$ (4) $\begin{bmatrix} -4 & -2 \\ -1 & 4 \end{bmatrix}$
15. If the angle of intersection at a point where the two circles with radii 5 cm and 12 cm intersect is 90° , then the length (in cm) of their common chord is:
- (1) $\frac{13}{2}$ (2) $\frac{60}{13}$ (3) $\frac{120}{13}$ (4) $\frac{13}{5}$
16. Let $\vec{a} = 3\hat{i} + 2\hat{j} + 2\hat{k}$ and $\vec{b} = \hat{i} + 2\hat{j} - 2\hat{k}$ be two vectors. If a vector perpendicular to both the vectors $\vec{a} + \vec{b}$ and $\vec{a} - \vec{b}$ has the magnitude 12 then one such vector is:
- (1) $4(2\hat{i} + 2\hat{j} + \hat{k})$ (2) $4(2\hat{i} + 2\hat{j} - \hat{k})$
 (3) $4(-2\hat{i} - 2\hat{j} + \hat{k})$ (4) $4(2\hat{i} - 2\hat{j} - \hat{k})$
17. Let $f: R \rightarrow R$ be a continuously differentiable function such that $f(2) = 6$ and $f'(2) = \frac{1}{48}$. If $\int_6^{f(x)} 4t^3 dt = (x-2)g(x)$, then $\lim_{x \rightarrow 2} g(x)$ is equal to :
- (1) 12 (2) 18 (3) 36 (4) 24
18. The number of solutions of the equation $1 + \sin^4 x = \cos^2 3x$, $x \in \left[-\frac{5\pi}{2}, \frac{5\pi}{2}\right]$ is:
- (1) 7 (2) 3 (3) 4 (4) 5
19. The integral $\int \frac{2x^3 - 1}{x^4 + x} dx$ is equal to: (Here C is a constant of integration)
- (1) $\frac{1}{2} \log_e \frac{(x^3 + 1)^2}{|x^3|} + C$ (2) $\log_e \frac{|x^3 + 1|}{x^2} + C$
 (3) $\frac{1}{2} \log_e \frac{|x^3 + 1|}{x^2} + C$ (4) $\log_e \frac{|x^3 + 1|}{x} + C$
20. Consider the differential equation, $y^2 dx + \left(x - \frac{1}{y}\right) dy = 0$. If value of y is 1 when $x = 1$, then the value of x for which $y = 2$, is:
- (1) $\frac{3}{2} - \sqrt{e}$ (2) $\frac{1}{2} + \frac{1}{\sqrt{e}}$ (3) $\frac{5}{2} + \frac{1}{\sqrt{e}}$ (4) $\frac{3}{2} - \frac{1}{\sqrt{e}}$
21. If α and β are the roots of the equation $375x^2 - 25x - 2 = 0$, then $\lim_{n \rightarrow \infty} \sum_{r=1}^n \alpha^r + \lim_{n \rightarrow \infty} \sum_{r=1}^n \beta^r$ is equal to:
- (1) $\frac{21}{346}$ (2) $\frac{29}{358}$ (3) $\frac{1}{12}$ (4) $\frac{7}{116}$

22. If three of the six vertices of a regular hexagon are chosen at random, then the probability that the triangle formed with these chosen vertices is equilateral is:
- (1) $\frac{3}{20}$ (2) $\frac{1}{5}$ (3) $\frac{1}{10}$ (4) $\frac{3}{10}$
23. If the volume of parallelepiped formed by the vectors $\hat{i} + \lambda\hat{j} + \hat{k}$, $\hat{j} + \lambda\hat{k}$ and $\lambda\hat{i} + \hat{k}$ is minimum, then λ is equal to:
- (1) $-\frac{1}{\sqrt{3}}$ (2) $\frac{1}{\sqrt{3}}$ (3) $-\sqrt{3}$ (4) $\sqrt{3}$
24. If $B = \begin{bmatrix} 5 & 2\alpha & 1 \\ 0 & 2 & 1 \\ \alpha & 3 & -1 \end{bmatrix}$ is the inverse of a 3×3 matrix A, then the sum of all values of α for which $\det(A) + 1 = 0$, is:
- (1) -1 (2) 0 (3) 1 (4) 2
25. The equation $y = \sin x \sin(x+2) - \sin^2(x+1)$ represents a straight line lying in:
- (1) second and third quadrants only (2) first, third and fourth quadrants
 (3) first, second and fourth quadrants (4) third and fourth quadrants only
26. Let P be the point of intersection of the common tangents to the parabola $y^2 = 12x$ and the hyperbola $8x^2 - y^2 = 8$. If S and S' denote the foci of the hyperbola where S lies on the positive x-axis then P divides SS' in a ratio:
- (1) $13 : 11$ (2) $2 : 1$ (3) $5 : 4$ (4) $14 : 13$
27. If $e^y + xy = e$, the ordered pair $\left(\frac{dy}{dx}, \frac{d^2y}{dx^2}\right)$ at $x = 0$ is equal to:
- (1) $\left(-\frac{1}{e}, -\frac{1}{e^2}\right)$ (2) $\left(-\frac{1}{e}, \frac{1}{e^2}\right)$ (3) $\left(\frac{1}{e}, -\frac{1}{e^2}\right)$ (4) $\left(\frac{1}{e}, \frac{1}{e^2}\right)$
28. If the line $\frac{x-2}{3} = \frac{y+1}{2} = \frac{z-1}{-1}$ intersects the plane $2x + 3y - z + 13 = 0$ at a point P and the plane $3x + y + 4z = 16$ at a point Q, then PQ is equal to:
- (1) 14 (2) $\sqrt{14}$ (3) $2\sqrt{7}$ (4) $2\sqrt{14}$
29. If the data x_1, x_2, \dots, x_{10} is such that the mean of first four of these is 11, the mean of the remaining six is 16 and the sum of squares of all of these is 2,000; then the standard deviation of this data is:
- (1) 2 (2) $\sqrt{2}$ (3) 4 (4) $2\sqrt{2}$
30. For $x \in \left(0, \frac{3}{2}\right)$, let $f(x) = \sqrt{x}$, $g(x) = \tan x$ and $h(x) = \frac{1-x^2}{1+x^2}$. If $\phi(x) = ((hof)og)(x)$, then $\phi\left(\frac{\pi}{3}\right)$ is equal to:
- (1) $\tan \frac{\pi}{12}$ (2) $\tan \frac{5\pi}{12}$ (3) $\tan \frac{11\pi}{12}$ (4) $\tan \frac{7\pi}{12}$